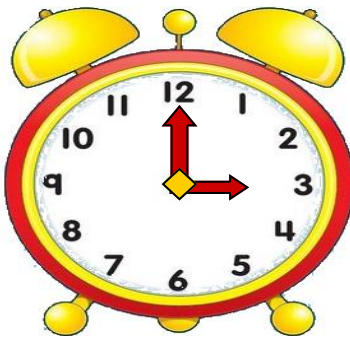
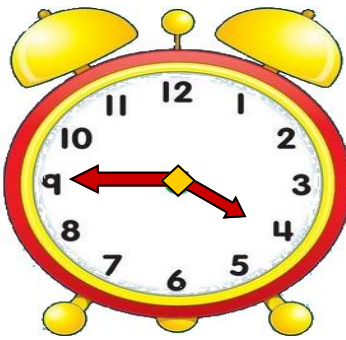


# What time is it?

## 1. Choose the correct option:



- A) It's three o'clock.  
B) It's four o'clock.



- A) It's five to one.  
B) It's a quarter to four.

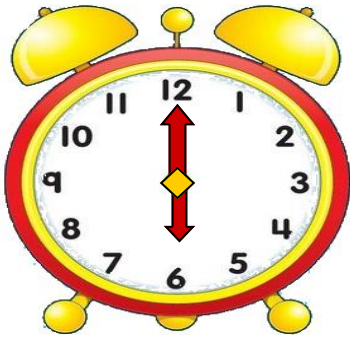


- A) It's half past one.  
B) It's two o'clock



- A) It's ten to five.  
B) It's five to six.

## 2. Write the time.



It's \_\_\_\_\_



It's \_\_\_\_\_



It's \_\_\_\_\_



It's \_\_\_\_\_

## 3. Draw the hands on the clocks.



It's midday.



It's half past five



It's ten to three



It's twenty past six



It's six o'clock



It's a quarter to one.



It's twenty five past six



It's a quarter past ten.